


3rd Grade Tier 3 Screener - Fall

Questions 1-3: Count the dots and draw a line below the total number of dots.

1.




6

7

8

9

2.




12

13

14

15

3.



16

17

18

19



Please stop, put your pencil down and wait for the next directions.



3rd Grade Tier 3 Screener - Fall

(continued)

Questions 4-6: Draw a line below the number that is greater or less.

4.

Greater

2

7

5.

Greater

9

4

6.

Less

5

7




Please stop, put your pencil down and wait for the next directions.

3rd Grade Tier 3 Screener - Fall

(continued)

Questions 7-9: Draw a line below the answer choice that is equal to the total number of dots.

7.




3

8

10

13

8.



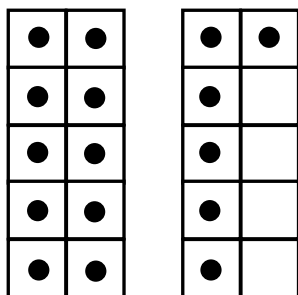
18

81

19

91

9.



71

61

17

16



Please stop, put your pencil down and wait for the next directions.

3rd Grade Tier 3 Screener - Fall

(continued)

Questions 10-12: Draw a line below the number shown by the base-ten blocks.

<p>10.</p> <div style="text-align: center; margin: 20px 0;"> </div> <div style="display: flex; justify-content: space-around; margin-top: 20px;"> 41 63 46 36 </div>
<p>11.</p> <div style="text-align: center; margin: 20px 0;"> </div> <div style="display: flex; justify-content: space-around; margin-top: 20px;"> 38 83 73 11 </div>
<p>12.</p> <div style="text-align: center; margin: 20px 0;"> </div> <div style="display: flex; justify-content: space-around; margin-top: 20px;"> 64 54 74 69 </div>



Please stop, put your pencil down and wait for the next directions.



3rd Grade Tier 3 Screener - Fall

(continued)

Questions 13-15: Draw a line below the sign that compares the two numbers.

13.

$$82 \quad \underline{\quad} \quad 76$$

>

<

=

14.

$$67 \quad \underline{\quad} \quad 89$$

>

<

=

15.

$$24 \quad \underline{\quad} \quad 42$$

>

<

=



Please stop, put your pencil down and wait for the next directions.



3rd Grade Tier 3 Screener - Fall

(continued)

Questions 16-18: Draw a line below the answer choice that is 10 more or 10 less than each number.

16.

10 more than 36

35

26

46

37

17.

10 less than 58

59

48

57

68

18.

10 less than 72

71

73

62

82



Please stop, put your pencil down and wait for the next directions.



3rd Grade Tier 3 Screener - Fall

(continued)

Questions 19-21: Draw a line below the number that adds to make 10.

19.

$$4 + \underline{\quad} = 10$$

4

5

6

7

20.

$$3 + \underline{\quad} = 10$$

5

6

7

8

21.

$$8 + \underline{\quad} = 10$$

1

2

3

4



Please stop, put your pencil down and wait for the next directions.



3rd Grade Tier 3 Screener - Fall

(continued)

22. When you are told to begin, answer as many as you can in 1 minute.

$4 + 1 = \underline{\quad}$

$3 + 1 = \underline{\quad}$

$1 + 3 = \underline{\quad}$

$2 + 0 = \underline{\quad}$

$2 + 2 = \underline{\quad}$

$1 + 2 = \underline{\quad}$

$3 + 2 = \underline{\quad}$

$0 + 3 = \underline{\quad}$

$0 + 4 = \underline{\quad}$

$1 + 4 = \underline{\quad}$

$1 + 1 = \underline{\quad}$

$2 + 3 = \underline{\quad}$

$2 + 1 = \underline{\quad}$

$5 + 0 = \underline{\quad}$



Please stop, put your pencil down and wait for the next directions.

3rd Grade Tier 3 Screener - Fall

(continued)

23. When you are told to begin, answer as many as you can in 1 minute.

$6 + 3 = \underline{\quad}$

$4 + 4 = \underline{\quad}$

$2 + 5 = \underline{\quad}$

$8 + 2 = \underline{\quad}$

$3 + 3 = \underline{\quad}$

$5 + 3 = \underline{\quad}$

$4 + 5 = \underline{\quad}$

$7 + 3 = \underline{\quad}$

$6 + 4 = \underline{\quad}$

$4 + 2 = \underline{\quad}$

$3 + 4 = \underline{\quad}$

$7 + 2 = \underline{\quad}$

$5 + 5 = \underline{\quad}$

$1 + 7 = \underline{\quad}$



Please stop, put your pencil down and wait for the next directions.



3rd Grade Tier 3 Screener - Fall

(continued)

24. When you are told to begin, answer as many as you can in 1 minute.

$4 - 2 = \underline{\quad}$

$5 - 0 = \underline{\quad}$

$2 - 1 = \underline{\quad}$

$5 - 2 = \underline{\quad}$

$3 - 2 = \underline{\quad}$

$4 - 4 = \underline{\quad}$

$2 - 0 = \underline{\quad}$

$5 - 4 = \underline{\quad}$

$3 - 1 = \underline{\quad}$

$4 - 1 = \underline{\quad}$

$2 - 2 = \underline{\quad}$

$4 - 0 = \underline{\quad}$

$5 - 3 = \underline{\quad}$

$1 - 1 = \underline{\quad}$



Please stop, put your pencil down and wait for the next directions.



3rd Grade Tier 3 Screener - Fall

(continued)

25. When you are told to begin, answer as many as you can in 1 minute.

$10 - 3 = \underline{\quad}$

$6 - 2 = \underline{\quad}$

$7 - 6 = \underline{\quad}$

$9 - 1 = \underline{\quad}$

$8 - 2 = \underline{\quad}$

$10 - 8 = \underline{\quad}$

$6 - 5 = \underline{\quad}$

$9 - 3 = \underline{\quad}$

$7 - 3 = \underline{\quad}$

$8 - 7 = \underline{\quad}$

$9 - 6 = \underline{\quad}$

$10 - 5 = \underline{\quad}$

$8 - 4 = \underline{\quad}$

$7 - 1 = \underline{\quad}$



Please stop, put your pencil down and wait for the next directions.