

2nd Grade Tier 3 Screener - Fall

Answer Key

Questions 1-3: Count the dots and draw a line below the total number of dots.

<p>1.</p> <div style="text-align: center; margin: 20px 0;"> </div> <div style="display: flex; justify-content: space-around; margin-top: 10px;"> 6 7 8 9 </div>
<p>2.</p> <div style="text-align: center; margin: 20px 0;"> </div> <div style="display: flex; justify-content: space-around; margin-top: 10px;"> 12 13 14 15 </div>
<p>3.</p> <div style="text-align: center; margin: 20px 0;"> </div> <div style="display: flex; justify-content: space-around; margin-top: 10px;"> 16 17 18 19 </div>



Please stop, put your pencil down and wait for the next directions.



2nd Grade Tier 3 Screener - Fall

(continued)

Questions 4-6: Draw a line below the number that is greater or less.

4.

Greater

2

7

5.

Greater

9

4

6.

Less

5

7




Please stop, put your pencil down and wait for the next directions.

2nd Grade Tier 3 Screener - Fall

(continued)

Questions 7-9: Draw a line below the answer choice that is equal to the total number of dots.

7.




3

8

10

13

8.




18

81

19

91

9.



71

61

17

16



Please stop, put your pencil down and wait for the next directions.



2nd Grade Tier 3 Screener - Fall

(continued)

Questions 10-12: Draw a line below the number that adds to make 10.

10.

$$4 + \underline{\quad} = 10$$

4

5

6

7

11.

$$3 + \underline{\quad} = 10$$

5

6

7

8

12.

$$8 + \underline{\quad} = 10$$

1

2

3

4



Please stop, put your pencil down and wait for the next directions.

2nd Grade Tier 3 Screener - Fall

(continued)

13. When you are told to begin, answer as many as you can in 1 minute.

$$4 + 1 = 5$$

$$3 + 1 = 4$$

$$1 + 3 = 4$$

$$2 + 0 = 2$$

$$2 + 2 = 4$$

$$1 + 2 = 3$$

$$3 + 2 = 5$$

$$0 + 3 = 3$$

$$0 + 4 = 4$$

$$1 + 4 = 5$$

$$1 + 1 = 2$$

$$2 + 3 = 5$$

$$2 + 1 = 3$$

$$5 + 0 = 5$$



Please stop, put your pencil down and wait for the next directions.

2nd Grade Tier 3 Screener - Fall

(continued)

14. When you are told to begin, answer as many as you can in 1 minute.

$4 - 2 = 2$

$5 - 0 = 5$

$2 - 1 = 1$

$5 - 2 = 3$

$3 - 2 = 1$

$4 - 4 = 0$

$2 - 0 = 2$

$5 - 4 = 1$

$3 - 1 = 2$

$4 - 1 = 3$

$2 - 2 = 0$

$4 - 0 = 4$

$5 - 3 = 2$

$1 - 1 = 0$



Please stop, put your pencil down and wait for the next directions.