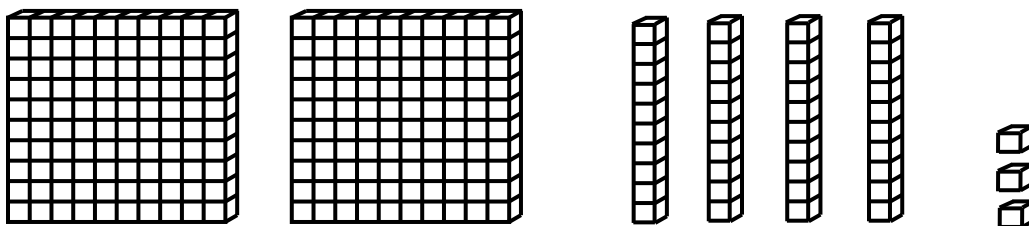


# 3<sup>rd</sup> Grade Readiness: Progress Assessment

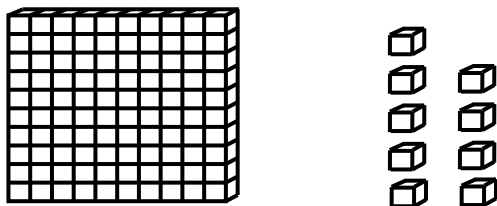
Questions 1-3: Find the number shown by the base ten blocks.

1.



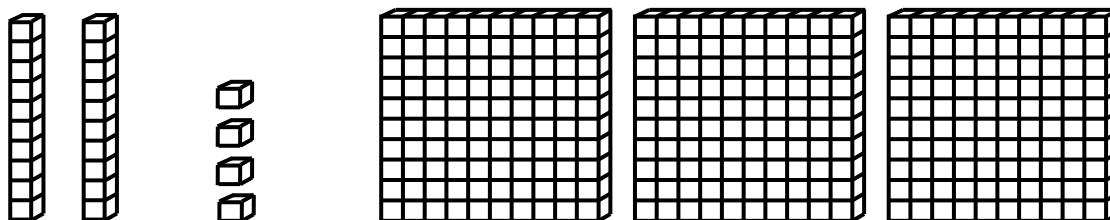
342 234 324 Answer: 243

2.



190 91 19 Answer: 109

3.



243 342 423 Answer: 324



Please stop, put your pencil down and wait for the next directions.



# 3<sup>rd</sup> Grade Readiness: Progress Assessment

(continued)

Questions 4-6: Mentally add and subtract by 10 or 100.

4.

$$647 + 100$$

547 637 657 Answer: 747

5.

$$804 - 10$$

814 904 704 Answer: 794

6.

$$609 - 100$$

709 599 619 Answer: 509



Please stop, put your pencil down and wait for the next directions.



# 3<sup>rd</sup> Grade Readiness: Progress Assessment

(continued)

Questions 7-9: Compare the numbers. (<, >, =)

7.

$$351 \text{ \_\_\_ } 348$$

< = Answer: >

8.

$$739 \text{ \_\_\_ } 742$$

> = Answer: <

9.

$$801 \text{ \_\_\_ } 796$$

< = Answer: >



Please stop, put your pencil down and wait for the next directions.



# 3<sup>rd</sup> Grade Readiness: Progress Assessment

(continued)

Questions 10-12: Add the numbers.

**10.**

$$\begin{array}{r} 46 \\ + 32 \\ \hline \end{array}$$

Answer: 78

**11.**

$$58 + 25 = \underline{\quad}$$

Answer: 83

**12.**

$$\begin{array}{r} 62 \\ + 54 \\ \hline \end{array}$$

Answer: 116



Please stop, put your pencil down and wait for the next directions.



# 3<sup>rd</sup> Grade Readiness: Progress Assessment

(continued)

Questions 13-15: Subtract the numbers.

**13.**

$$\begin{array}{r} 57 \\ -25 \\ \hline \end{array}$$

Answer: 32

**14.**

$$52 - 28 = \underline{\quad}$$

Answer: 24

**15.**

$$\begin{array}{r} 60 \\ -17 \\ \hline \end{array}$$

Answer: 43



Please stop, put your pencil down and wait for the next directions.



# 3<sup>rd</sup> Grade Readiness: Progress Assessment

(continued)

**Question 16.** When you are told to begin, answer as many as you can in 1 minute.

$9 + 3 = 12$

$8 + 6 = 14$

$8 + 8 = 16$

$6 + 7 = 13$

$8 + 7 = 15$

$7 + 9 = 16$

$7 + 5 = 12$

$5 + 9 = 14$

$9 + 8 = 17$

$4 + 8 = 12$

$9 + 6 = 15$

$7 + 7 = 14$

$9 + 9 = 18$

$8 + 5 = 13$



Please stop, put your pencil down and wait for the next directions.



# 3<sup>rd</sup> Grade Readiness: Progress Assessment

(continued)

**Question 17.** When you are told to begin, answer as many as you can in 1 minute.

$12 - 3 = 9$

$11 - 8 = 3$

$13 - 9 = 4$

$14 - 5 = 9$

$16 - 8 = 8$

$12 - 9 = 3$

$11 - 7 = 4$

$15 - 8 = 7$

$12 - 6 = 6$

$11 - 2 = 9$

$16 - 9 = 7$

$13 - 5 = 8$

$15 - 6 = 9$

$14 - 7 = 7$



Please stop, put your pencil down and wait for the next directions.