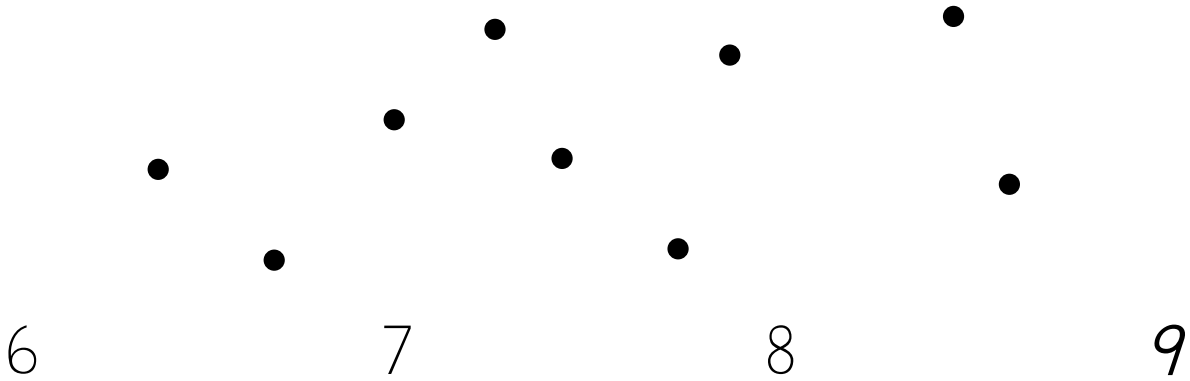



# 1<sup>st</sup> Grade Readiness: Progress Assessment

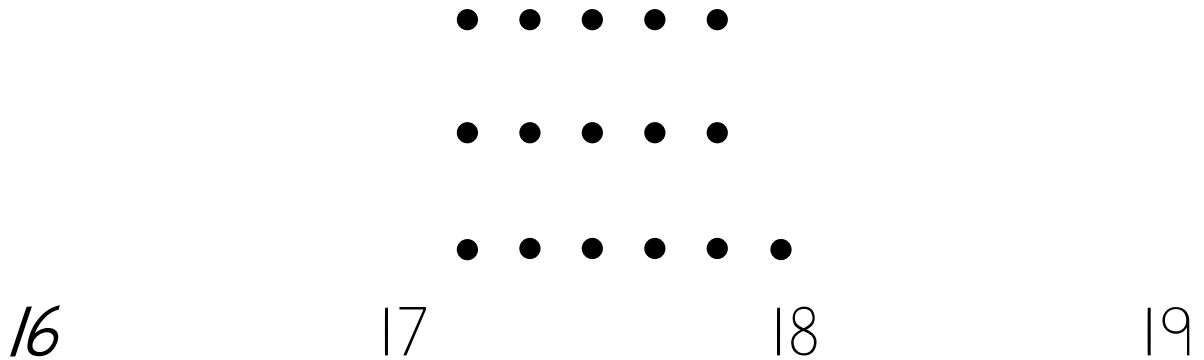
1.



2.



3.





# 1<sup>st</sup> Grade Readiness: Progress Assessment

(continued)

4.



Greater

7

9

5.



Greater

8

5

6.




Less

8

6

(continued)

7.



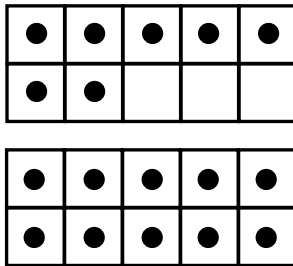
4

6

16

10

8.




17

71

18

81

9.



18

81

91

19

10.



$$7 + \underline{\quad} = 10$$

2

3

4

5

11.



$$4 + \underline{\quad} = 10$$

4

5

6

7

12.



$$1 + \underline{\quad} = 10$$

8

9

6

7

**13.** When you are told to begin, answer as many as you can in 1 minute.



$$2 + 1 = 3$$

$$5 + 0 = 5$$

$$4 + 1 = 5$$

$$3 + 1 = 4$$

$$1 + 3 = 4$$

$$2 + 0 = 2$$

$$2 + 2 = 4$$

$$1 + 2 = 3$$

$$3 + 2 = 5$$

$$0 + 3 = 3$$

$$0 + 4 = 4$$

$$1 + 4 = 5$$

$$1 + 1 = 2$$

$$2 + 3 = 5$$



Please stop, put your pencil down and wait for the next directions.

**14.** When you are told to begin, answer as many as you can in 1 minute.



$$4 - 2 = 2$$

$$5 - 0 = 5$$

$$2 - 1 = 1$$

$$5 - 2 = 3$$

$$3 - 2 = 1$$

$$4 - 4 = 0$$

$$2 - 0 = 2$$

$$5 - 4 = 1$$

$$3 - 1 = 2$$

$$4 - 1 = 3$$

$$2 - 2 = 0$$

$$4 - 0 = 4$$

$$5 - 3 = 2$$

$$1 - 1 = 0$$



Please stop, put your pencil down and wait for the next directions.